



NAME \_\_\_\_\_

DATE \_\_\_\_\_

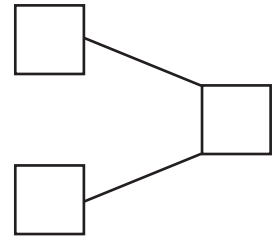
## CAMPARING THE NUMBERS

Count the objects and fill in the number bond and place value chart. Complete the sentences to add the tens and ones.

1)




$5 \times 10 = 50$



$50 + 0 = \underline{\quad\quad}$

How much 50 is more than 50 ? Ans: \_\_\_\_.

2)



$7 \times 10 = 70$

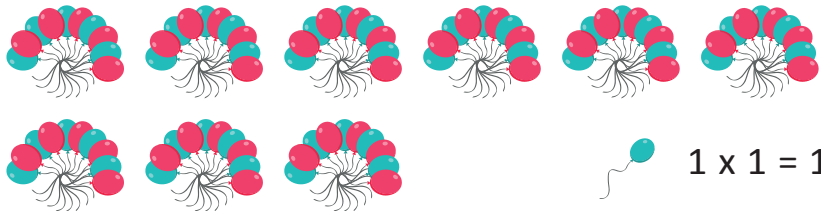
$7 \times 1 = 7$

Tens	Ones

$70 + 7 = \underline{\quad\quad}$

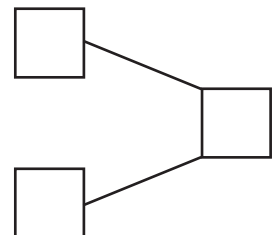
How much 77 is more than 70 ? Ans: \_\_\_\_.

3)



$9 \times 10 = 90$

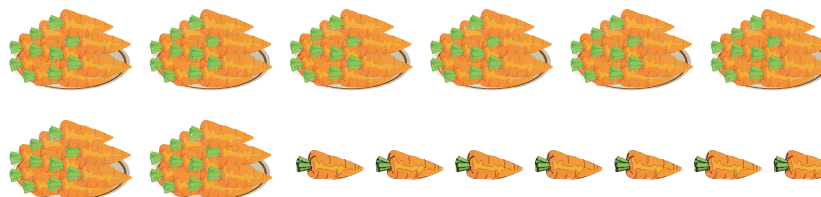
$1 \times 1 = 1$



$90 + 1 = \underline{\quad\quad}$

How much 91 is more than 90 ? Ans: \_\_\_\_.

4)



$8 \times 10 = 80$

$7 \times 1 = 7$

Tens	Ones

$80 + 7 = \underline{\quad\quad}$

How much 87 is more than 80 ? Ans: \_\_\_\_.